

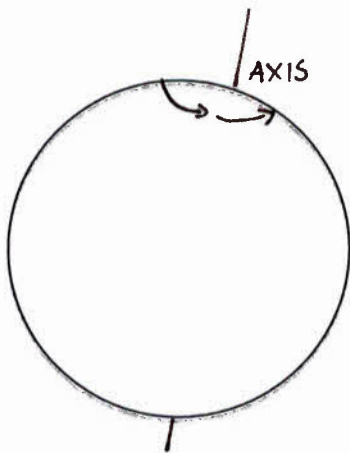
PAKISTAN INTERNATIONAL SCHOOL , RIYADH .
WORKSHEET SOCIALSTUDIES CLASS 4TH
1ST SEMESTER (2017-18)WORK SHEET NO. 1
(LESSON 1, THE EARTH IN SPACE 2, CLIMATE)

NAME: _____ **CLASS/SEC:** _____

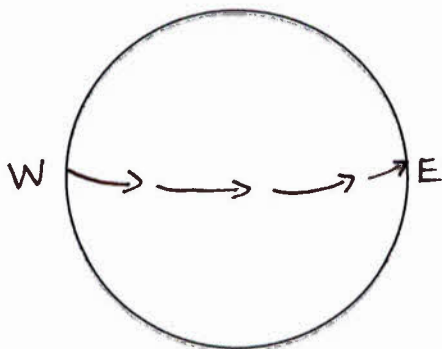
Q: True or false (5)

- 1- Seasons are caused by the Earth's revolution round the sun and by the tilt of its axis _____
- 2- Rotation of the earth takes 18 hours _____
- 3- Hemi means half _____
- 4- Southern half of the Earth is called Northern hemisphere _____
- 5- The sun revolves around the Earth _____

Q: Fill in the blanks according to the diagrams

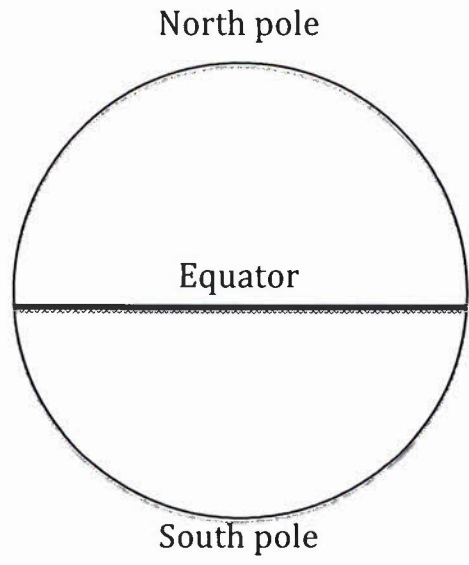


The movement of earth on its axis is called



The Earth rotates from _____

Q: Color the hottest places of Earth with red and coldest places with light blue colors.





Q:MCQ's (5) Tick the right answer

- 1- The climate on Earth is very hot near (equator _____ poles)
- 2- In Pakistan the hottest areas are in (deserts _____ on mountains)
- 3- Areas which are very dry get (very little _____ heavy) rain
- 4- The Earth is surrounded by (water _____ atmosphere)
- 5- Closeness to the sea helps to keep the temperature (down _____ high)in the hot summer months of a place.

Q: Name the symbols related to the weather chart.









PAKISTAN INTERNATIONAL SCHOOL , RIYADH .

WORKSHEET SOCIAL STUDIES CLASS 4TH

1ST SEMESTER (2017-18)

WORK SHEET NO. 2

(LESSON 3, OUR COUNTRY 4, THE WESTERN HIGHLANDS)

NAME: _____ CLASS/SEC: _____

Q: True or false

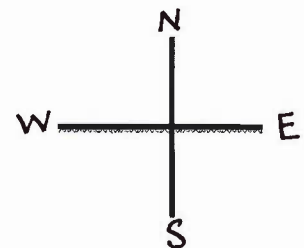
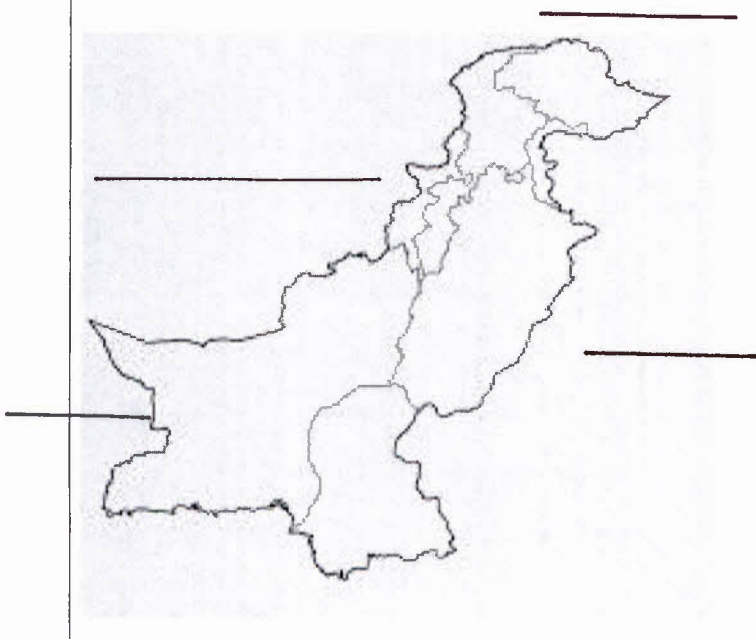
1- Saudi Arabia ,China and India are the countries larger than
Pakistan _____

2- Sri lanka , Bangladesh and Nepal are the countries smaller than
Pakistan _____

3- Pakistan is in the southern part of the continent of Asia _____

4- 50 % of the population of Pakistan are Muslims. _____

Q: Write the names of neighboring countries of Pakistan on the map




Q: Write down the names of the mountain ranges of Pakistan.

1, _____ 2, _____

3, _____ 4, _____

5, _____ 6, _____

Q: Write the names of the physical features on the following diagram:
Plain, sea level, mountain, plateau



Q: True or false :

1- Islamabad is situated in Potohar plateau _____

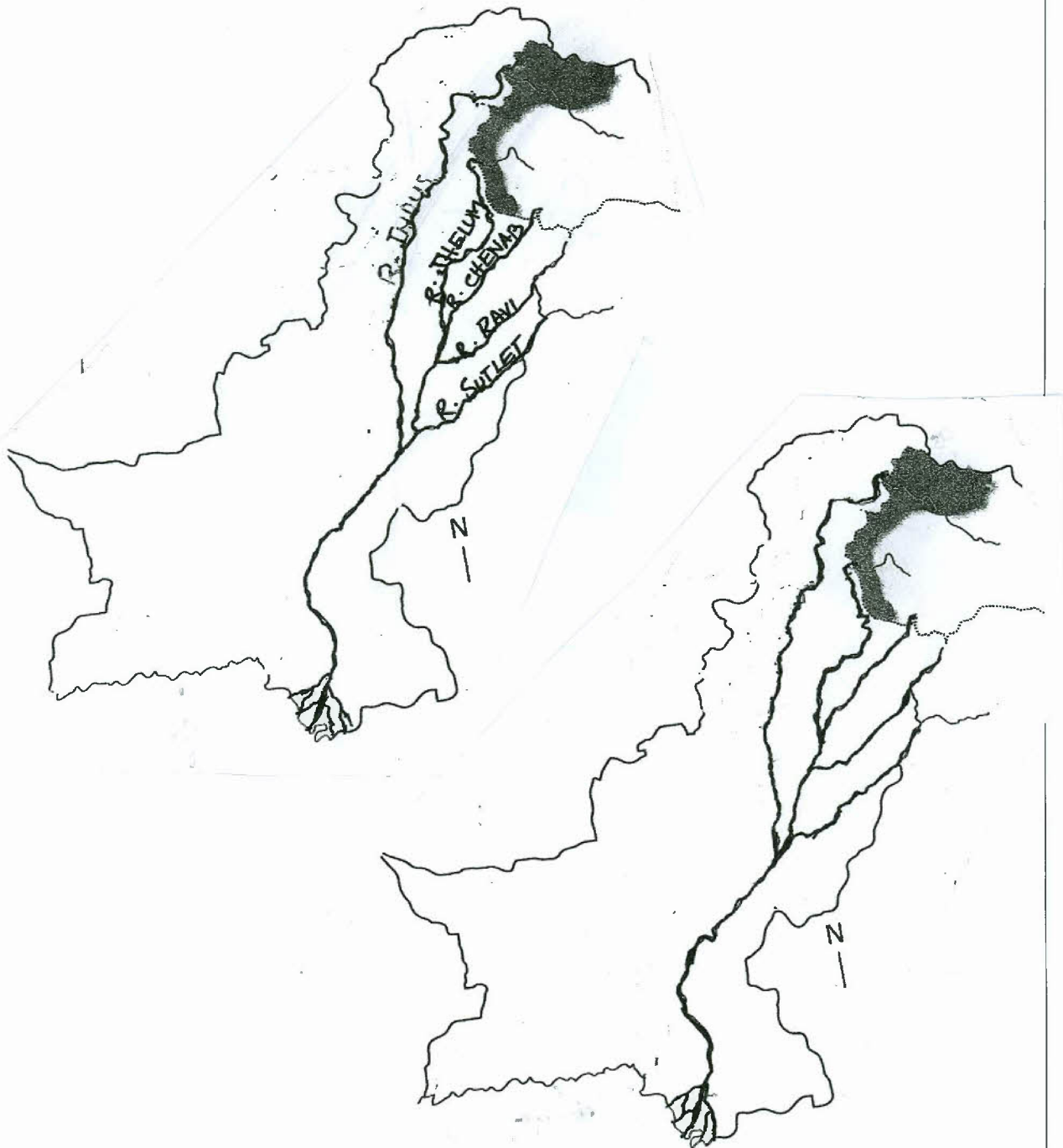
2- Mountains in the west of Pakistan are higher than the mountains in the north _____

PAKISTAN INTERNATIONAL SCHOOL , RIYADH .
WORKSHEET SOCIAL STUDIES CLASS 4TH

1ST SEMESTER (2017-18) WORK SHEET NO. 3
(LESSON 5 , RIVER INDUS AND ITS PLAINS 6, THE SOIL AND
AGRICULTURE)

NAME: _____ CLASS/SEC: _____

Q; Fill in the names of rivers in the given map



Q: Fill in the columns for crops grown in Pakistan.

FOOD CROPS	CASH CROPS
1-	1-
2-	2-
3-	3-
4-	4-

Q: Label the kinds of farming in Pakistan:

Poultry farm , livestock farm , terrace farm , crops farm

